

NAME:

PERIOD:

DATE:

BODY SYSTEMS CLASSWORK 3

Name the body system that is pictured to the right, and describe its job in the space below.

Name the labelled organ, and explain its purpose:

A.

B.

C.

D.

E. (part of excretory system)

The _____ are in our mouth and help to physically break down food.

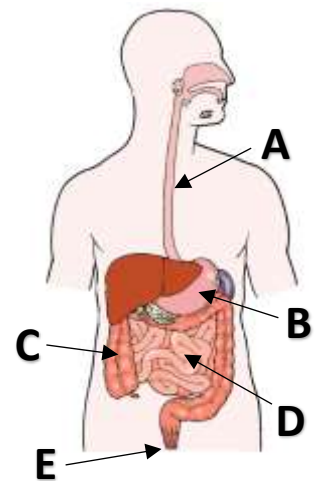
Saliva helps the digestive system in 3 ways. What are they?

1.

2.

3.

What is the purpose of food for our bodies?



Name the body system that is pictured to the right, and describe its job in the space below.

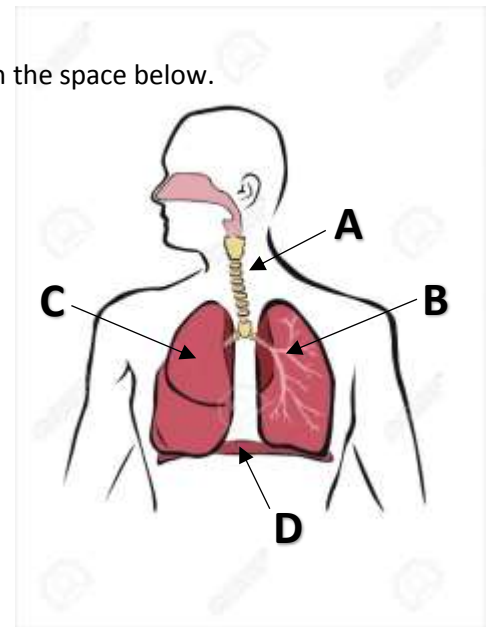
Name the labelled organ, and explain its purpose:

A.

B.

C.

D.



Why does our body use O_2 (oxygen gas) for?

Name the body system that is pictured to the right, and describe its job in the space below.

Name the labelled organ, and explain its purpose:

A.

B.

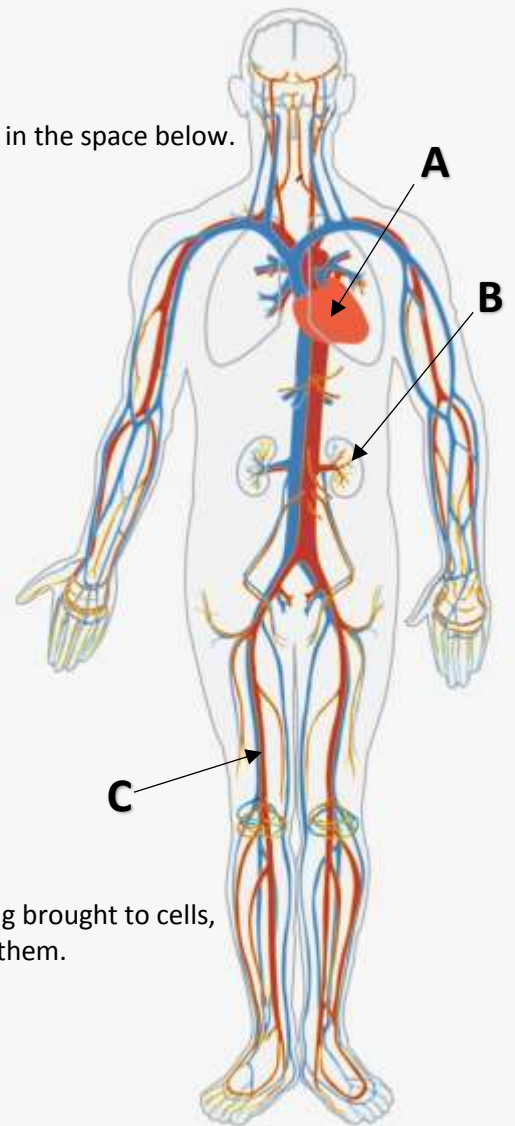
C.

There are 5 materials that the circulatory system carries. Some are being brought to cells, and some are being taken away from cells, one material is both. Name them.

materials taken to cells –

materials taken from cells -

material that goes both to & from cells –



There are 3 types of blood vessels. Name them and tell what they do.

a.

b.

c.

Name the body system that is pictured to the right, and describe its job in the space below.

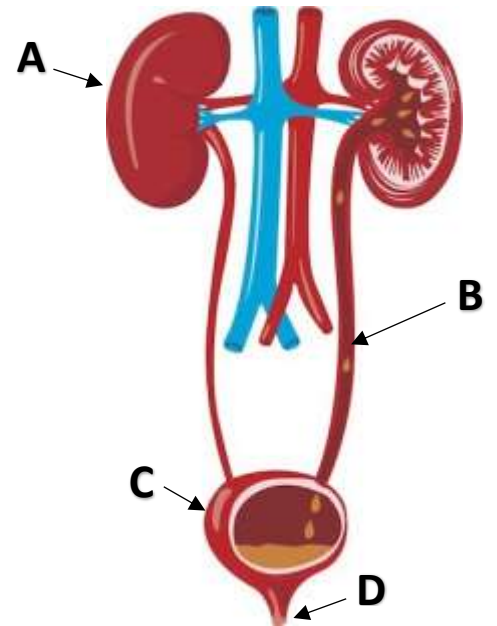
Name the labelled organ, and explain its purpose:

A.

B.

C.

D.



The anus is also part of the excretory system. What does it do?